


Shopping



shopping boot baby car
barking trolley crying dog

1. _____

2. _____


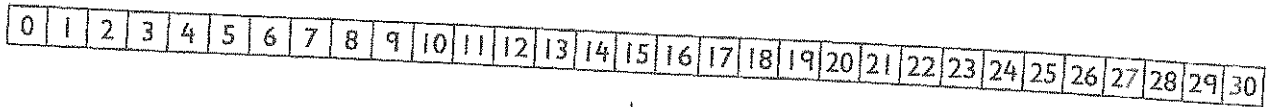
3. _____

Write three sentences about what is happening in the picture. Then write a sentence about a time when you went shopping.

Name _____

Date 24th June


What is 1 or 10 more?



Ellie has beads.

Sam has 10 more beads than Ellie.

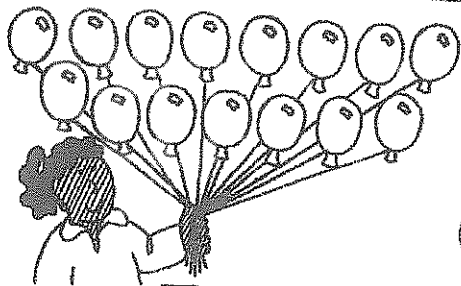
Sam has beads. 




Joe has fish.

Amir has 1 more fish than Joe.

Amir has fish. 




Isha has balloons.

Yuko has 1 more balloon than Isha. 

Yuko has balloons.



Leon has candles.

Naomi has 10 more candles than Leon. 

Naomi has candles.

Instructions

In each panel, count the objects and write the number in the box below. Then, using the number line at the top, count on one or ten more as specified and write this number in the second box.