

Work for Monday 22nd June

English – Remember to write a diary entry and read an English book.

Complete the attached grammar sheet by putting in the missing punctuation. I will place this on the class homepage as an online activity, so you can do it online and I will place it on the link, so you can print it off if you prefer.

Writing Activity - write an acrostic poem about summer holidays. You could use the words summer holidays or use the name of something you associate with summer for example ice cream, beaches.

S
U
M
M
E
R

H
O
L
I
D
A
Y

Maths W.S. Complete the Maths W.S. N41
Hundredths, write the amounts of money in pounds.
Remember the decimal point comes between the
hundreds and tens columns. This sheet is only on the
link and not on as a class activity.

Science Today we will complete our Science
activities on line. Go to www.bbc.co.uk/schools then
click on Science. Scroll down to KS2 bitesize
science. Click on this; then click on materials.
Complete all the activities listed under solids, liquids
and gases.

Name: _____

Date: _____


Punctuate the text below.

James and mary live with their grandmother in a large four-bedroomed house marys bedroom is on the second floor of the house but james bedroom is in the attic mary does not like visiting her brothers bedroom because she finds the attic quite scary it is quiet and dark and there are bugs and spiders in it once mary found a huge spider as big as her hand up there james on the other hand loves sleeping in the attic sometimes he pretends he is inside a tall tower belonging to an old castle


James and marys grandmother is quite ill and has to spend a lot of her time in bed therefore james and mary have to be quiet when they are playing in the house on warm days they do not play in the house at all instead they go to grandmothers large garden where there are many tall trees to climb there is also a little pond with several golden fish swimming in it


Name _____


Hundredths




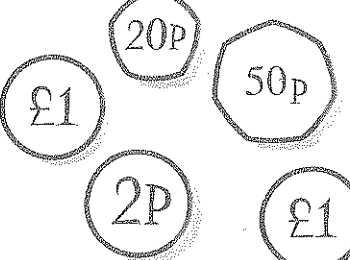
Write each amount in pounds.


1. 
£ 1.22


2. 
£


3. 
£


4. 
£


5. 
£

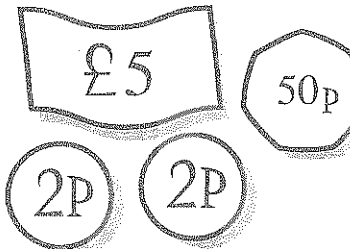
6. 
£


7. 
£

8. 
£

9. 
£

10. 
£

11. 
£

12. 
£