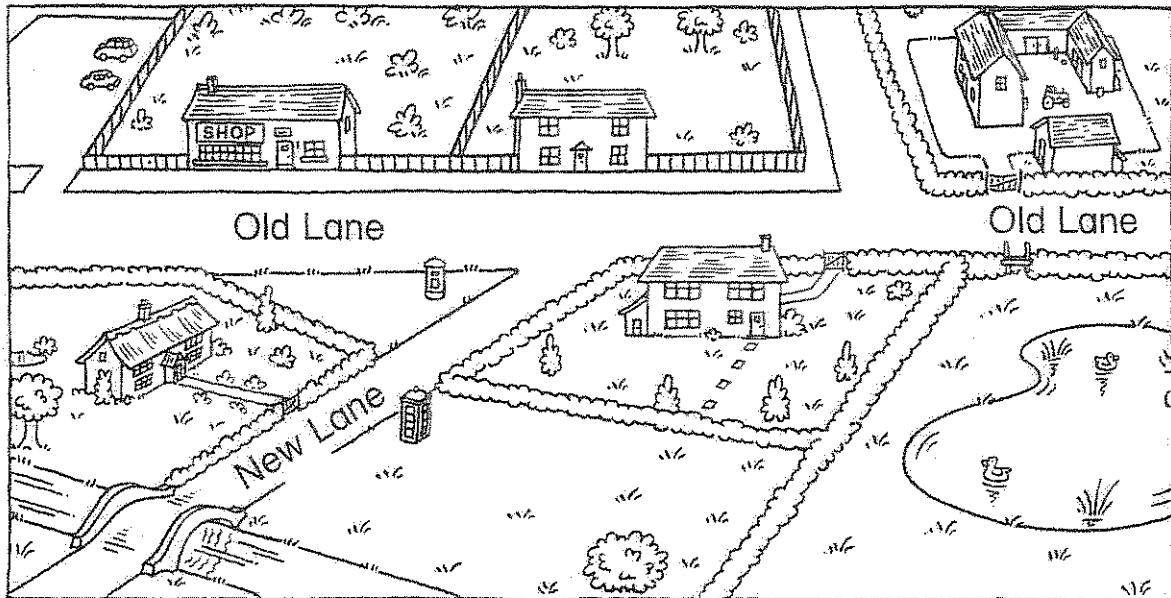


# Village report

- Look at the picture map.



- Fill in the gaps.

In the village there are two lanes. They are called Old Lane and \_\_\_\_\_.

In Old Lane there is a sh\_\_\_\_\_ and a car p\_\_\_\_\_.


Beside the sh\_\_\_\_\_ there is a h\_\_\_\_\_

and then a f\_\_\_\_\_. On one side of New

L\_\_\_\_\_ there is a h\_\_\_\_\_.

On the other side is a t\_\_\_\_\_ b\_\_\_\_\_. There is a

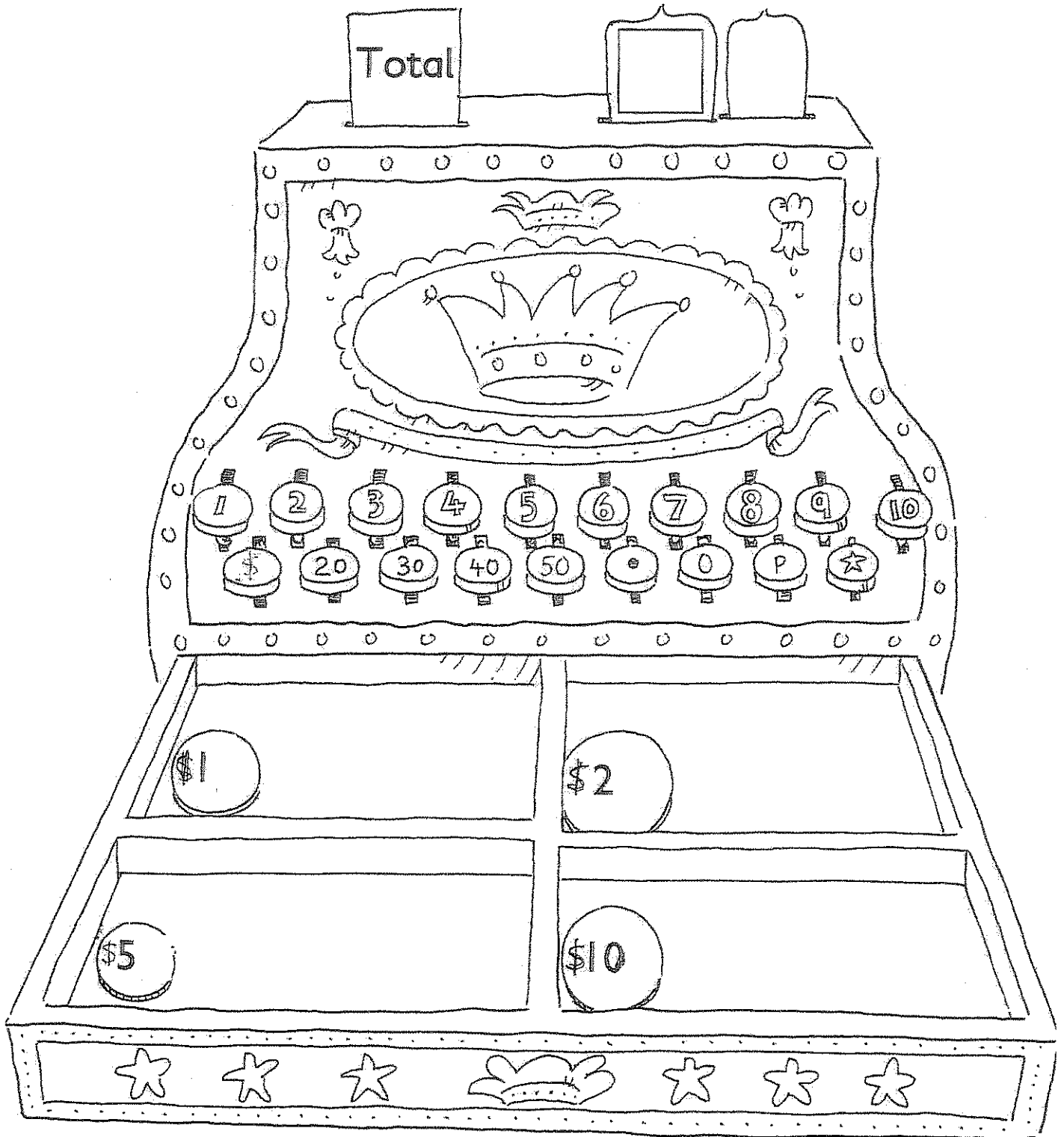
br\_\_\_\_\_ in New Lane.



- Write two more sentences about the village.

Name \_\_\_\_\_ Date \_\_\_\_\_

# Coin totals



**Instructions**

Ask for all the 1p, 2p, 5p and 10p coins that can be found at home. Sort the coins according to value and count how many there are in each set. Then, using plain circles, draw the coins in each set in the appropriate box in the cash register. Finally, work out how much money there is altogether, writing the answer in the tab.

