




Signs




run. do not
Please



the away. Put
brushes



our to school.
Welcome



Write each group of words as a correct sentence. Then write a sentence to go with the last picture.
Draw pictures to illustrate the first two sentences.

Name _____

Date 25th June

Building calculations

$$3 + 10 = 13$$

$$13 - 10 = 3$$

$$4 + 10 = \square$$

$$14 - 10 = \square$$

$$5 + 10 = \square$$

$$15 - 10 = \square$$

$$6 + 10 = \square$$

$$16 - 10 = \square$$

$$7 + 10 = \square$$

$$17 - 10 = \square$$

Instructions

Complete the addition and subtraction problems, writing the missing number in the space on the building blocks. Then colour the blocks to match each other.

